

Name: _____

UNIVERSITY OF CALIFORNIA
College of Engineering
Department of Electrical Engineering
and Computer Sciences

Professor David Tse

11 March 1997

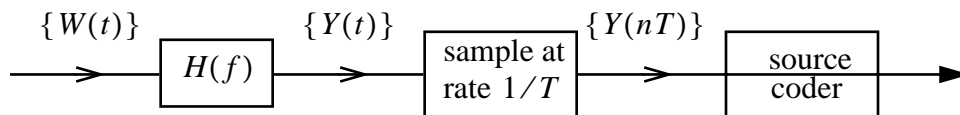
EECS 121 — MIDTERM

Problem 1 (10 points) — True or False

Scoring= +2 for correct answer with explanation
+1 for correct answer without explanation
-1 for incorrect answer
0 if left blank

- a) $E(X + Y) = E(X) + E(Y)$ **only** if the random variables X and Y are independent.
- b) $\text{Var}(X + Y) = \text{Var}(X) + \text{Var}(Y)$ if X and Y are uncorrelated.
- c) If X and Y are uncorrelated discrete-valued random variables, then $P(X = x|Y = y) = P(X = x)$ for all y and x .
- d) Let X be a random variable and consider the process $Y(t) = Xt$ for all t . Then $\{Y(t)\}$ is strict sense stationary.
- e) Let X, Y, Z be 3 random variables defined on the same probability space. Suppose X and Y are pairwise independent, Y and Z are pairwise independent and X and Z are pairwise independent. Then X, Y, Z are independent random variables.

Problem 2 (15 points)



Consider the system above. $\{W(t)\}$ is a zero-mean white Gaussian process with power spectrum density $\frac{N_0}{2}$.

$H(f)$ is a stable LTI filter.

[2 pts.] a) What is the power of $\{W(t)\}$, $E[|W(t)|^2]$?

[2 pts.] b) What is the power spectrum density of the output $\{Y(t)\}$ in terms of $H(f)$?

[2 pts.] c) If $H(f) = \begin{cases} 1 & \text{if } |f| < W \\ 0 & \text{else} \end{cases}$, then what is the average power in the output $E[|Y(t)|^2]$?

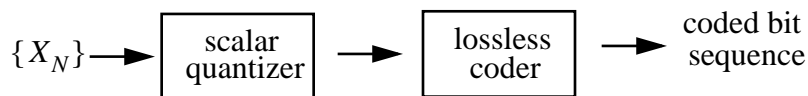
[2 pts.] d) Suppose we sample the output $\{Y(t)\}$ at rate $\frac{1}{T} = 2W$ samples per second. What is the auto-correlation function of the discrete-time process $\{Y(nT)\}$? Is the process Gaussian?

[2 pts.] e) Suppose we now sample the process at rate $\frac{1}{T} = 4W$. What is the auto-correlation function of the sampled process?

[5 pts.] f) We now want to quantize the samples $\{Y(nT)\}$ using DPCM coding based on linear prediction of the current sample from the previous sample. For the two cases above (i.e., sampling rates $2W$ and $4W$), find the optimal linear predictor. Is there any benefit of doing DPCM over PCM?

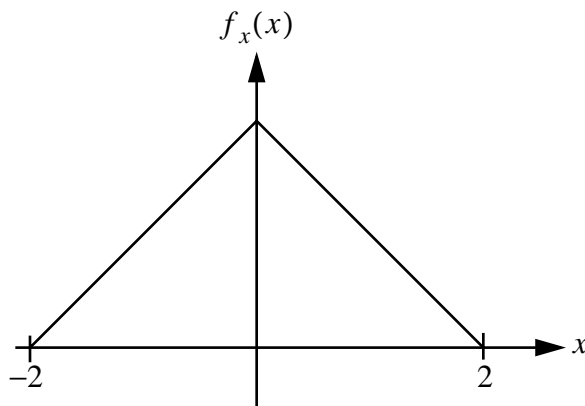
Problem 3 (13 points)

Consider a source coder with a scalar quantizer followed by a lossless coder.



Each sample X_n is scalar quantized, and the levels are then represented by a possibly variable length binary code. The codewords are then transmitted.

Suppose $\{X_n\}$ is stationary and each sample has the following density:

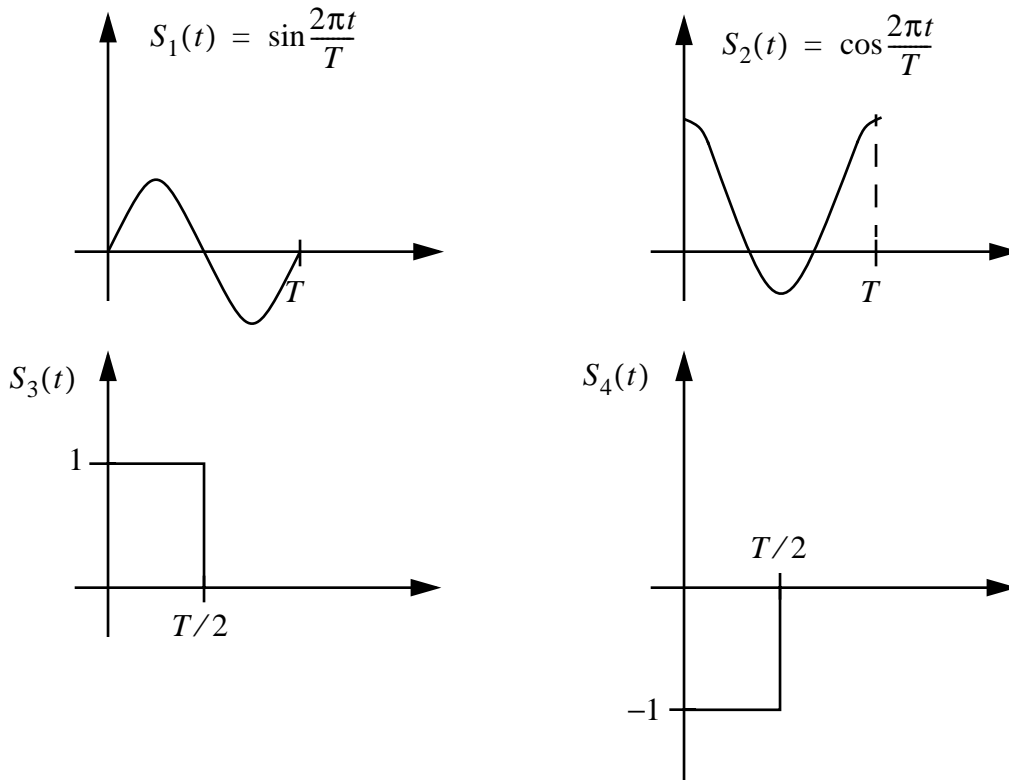


[7 pts.] a) The levels of the quantizers are chosen to be at $\pm\frac{1}{3}, \pm\frac{5}{3}$. Calculate the SQNR.

[6 pts.] b) Find the optimal lossless coder to minimize the average bit rate of the coded stream. What is the minimum average bit rate?

Problem 4 (12 points)

Consider a modulation system with four signal waveforms:



The signals are transmitted over an AWGN channel, $Y(t) = s_m(t) + W(t)$.

- [7 pts.] a) Find an orthonormal basis for the signal waveforms and hence design a decorrelator to extract a set of sufficient statistics for optimal detection. How many sufficient statistics are needed?
- [5 pts.] b) Suppose the received signal is projected onto the waveforms $s_1(t), s_2(t), s_3(t), s_4(t)$ instead. Do these four components provide sufficient information for optimal detection of the transmitted waveform? Why?