

EECS 42 Intro. electronics for CS Spring 2003 Lecture 4: 02/03/03 A.R. Neureuther
Version Date 02/02/03

EECS 42 Introduction to Electronics for Computer Science

Andrew R. Neureuther

Lecture #5

- Nonlinear (NL) elements
- Graphical NL solutions
- Power for NL circuits

<http://inst.EECS.Berkeley.EDU/~ee42/>

Copyright 2001, Regents of University of California

EECS 42 Intro. electronics for CS Spring 2003 Lecture 4: 02/03/03 A.R. Neureuther
Version Date 02/02/03

Example of I-V Graphs

Simple Circuit, e.g. voltage source + resistor.

If two circuit elements are in series the current is the same; clearly the total voltage will be the sum of the voltages i.e. $V_S + IR$.

We can graph this on the I-V plane. We find the I-V graph of the combination by adding the voltages V_S and IR at each current I .

Lets do an example for $V_S = 2V$, $R = 2K$

Copyright 2001, Regents of University of California

EECS 42 Intro. electronics for CS Spring 2003 Lecture 4: 02/03/03 A.R. Neureuther
Version Date 02/02/03

Game Plan 02/05/03

Monday 02/03/03

- Capacitors and Inductors; Equivalent Sources
Schwarz and Oldham: 5.1-5.2, 3.1

Wednesday 02/05/03

- N-L Elements; Graphical Solutions; Power
Schwarz and Oldham: 3.2-3.4

Next (4th) Week

- RC Transient
Schwarz and Oldham: 8.1 plus Handouts

Problem Set #3 – Out 2/2/03 - Due 2/12/03 2:30 in box near 275 Cory
3.1 and 3.2 charging capacitors; 3.3–3.5; Equivalent Circuits;

Copyright 2001, Regents of University of California

EECS 42 Intro. electronics for CS Spring 2003 Lecture 4: 02/03/03 A.R. Neureuther
Version Date 02/02/03

Simplest Equivalent Circuits

Thevenin **Norton**

An adequately equivalent circuit is one that has an I vs. V graph that is identical to that of the original circuit.

Copyright 2001, Regents of University of California

EECS 42 Intro. electronics for CS Spring 2003 Lecture 4: 02/03/03 A.R. Neureuther
Version Date 02/02/03

Example of I-V Graphs

Resistors in Series

If two resistors are in series the current is the same; clearly the total voltage will be the sum of the two IR values i.e. $I(R_1 + R_2)$.

Thus the equivalent resistance is $R_1 + R_2$ and the I-V graph of the series pair is the same as that of the equivalent resistance.

Of course we can also find the I-V graph of the combination by adding the voltages directly on the I-V axes. Lets do an example for $1K + 4K$ resistors

Copyright 2001, Regents of University of California

EECS 42 Intro. electronics for CS Spring 2003 Lecture 4: 02/03/03 A.R. Neureuther
Version Date 02/02/03

Example of I-V Graphs

Nonlinear element, e.g. lightbulb

If we think of the light bulb as a sort of resistor, then the resistance changes with current because the filament heats up. The current is reduced (sort of like the resistance increasing). I say "sort of" because a resistor has, by definition a linear I-V graph and R is always the same.

But for a light bulb the graph kind of "rolls over", becoming almost flat.

Consider a 100 Watt bulb, which means at the nominal line voltage of 117 V the current is 0.85A. ($117 \text{ V} \times 0.85 \text{ A} = 100\text{W}$).

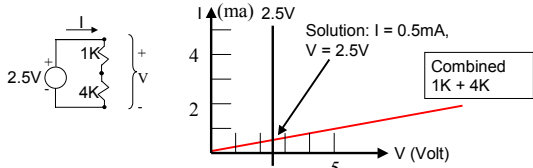
Copyright 2001, Regents of University of California

I-V Graphs as a method to solve circuits

We can find the currents and voltages in a simple circuit graphically. For example if we apply a voltage of 2.5V to the two resistors of our earlier example:

We draw the I-V of the voltage and the I-V graph of the two resistors on the same axes. Can you guess where the solution is?

At the point where the voltages of the two graphs AND the currents are equal. (Because, after all, the currents are equal, as are the voltages.)



This is called the LOAD LINE method; it works for harder (non-linear) problems

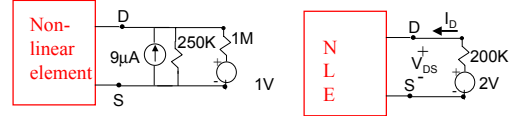
Copyright 2001, Regents of University of California

The Load-Line Method

We have a circuit containing a two-terminal non-linear element "NLE", and some linear components.

First replace the entire linear part of the circuit by its Thevenin equivalent (which is a resistor in series with a voltage source). We will learn how to do this in Lecture 11.

Then define I and V at the NLE terminals (typically associated signs)



NOTE: In lecture 11 we will show that the circuit shown on the left is equivalent to a 200K resistor in series with 2V.

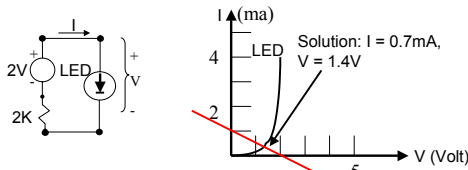
Copyright 2001, Regents of University of California

Another Example of the Load-Line Method

Lets hook our 2K resistor + 2V source circuit up to an LED (light-emitting diode), which is a very nonlinear element with the IV graph shown below.

Again we draw the I-V graph of the 2V/2K circuit on the same axes as the graph of the LED. Note that we have to get the sign of the voltage and current correct!! (The sign of the current is reversed from page 3)

At the point where the two graphs intersect, the voltages and the currents are equal, in other words we have the solution.



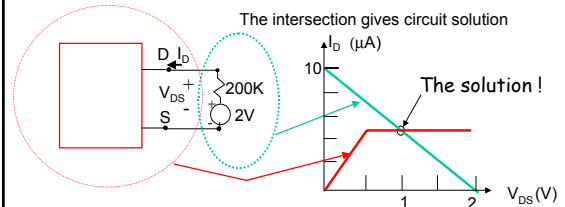
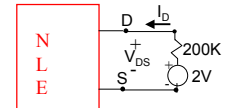
Copyright 2001, Regents of University of California

Example of Load-Line method (con't)

Given the graphical properties of two terminal non-linear circuit (i.e. the graph of a two terminal device)

And have this connected to a linear (Thévenin) circuit

Whose I-V can also be graphed on the same axes ("load line")



Copyright 2001, Regents of University of California

Power of Load-Line Method

We have a circuit containing a two-terminal non-linear element "NLE", and some linear components.

We will show in a few days that the entire linear part of the circuit can be replaced by an equivalent, called the Thevenin equivalent. This equivalent circuit consists of a voltage source in series with a resistor. (Just like the example we just worked!).

So if we replace the entire linear part of the circuit by its Thevenin equivalent our new circuit consists of (1) a non-linear element, and (2) a simple resistor and voltage source in series.

If we are happy with the accuracy of graphical solutions, then we just graph the I vs V of the NLE and the I vs V of the resistor plus voltage source on the same axes. The intersection of the two graphs is the solution. (Just like the problem on page 6)

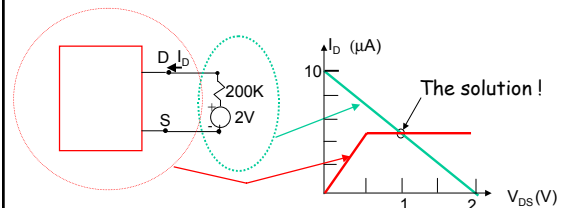
Copyright 2001, Regents of University of California

Load-Line method

The method is graphical, and therefore approximate

But if we use equations instead of graphs, it could be accurate

It can also be used to find solutions to circuits with three terminal nonlinear devices (like transistors) See lectures 21-22



Copyright 2001, Regents of University of California

Power Calculation Review

Power is calculated the same way for linear and non-linear elements and circuits.

For any circuit or element the dc power is $I \times V$ and, if associated signs are used, represents heating for positive power or extraction of energy for negative signs.

For example in the last example the NLE has a power of $+1V \times 5\mu A$ or $5\mu W$. It is absorbing power. The rest of the circuit has a power of $-1V \times 5\mu A$ or $-5\mu W$, because the signs are unassociated. It is delivering the $5\mu W$ to the NLE.

So what is the power absorbed by the 200K resistor?

Answer: $I \times V$ is $+5mA \times (5mA \times 200K) = 5mW$. Then the voltage source must be supplying a total of 10mW. Can you show this?