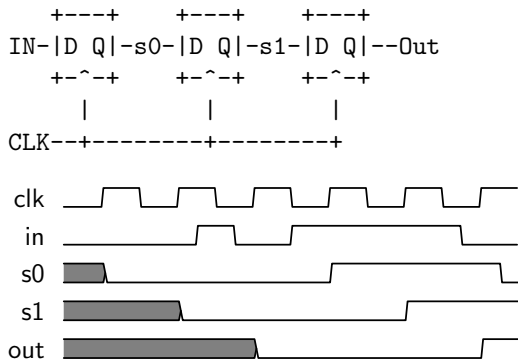
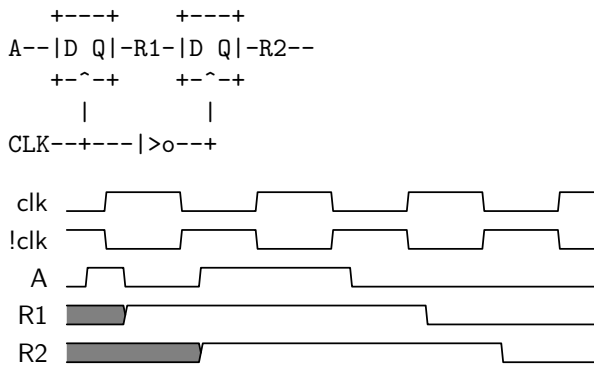


## State

- Fill out the timing diagram for the circuit below:

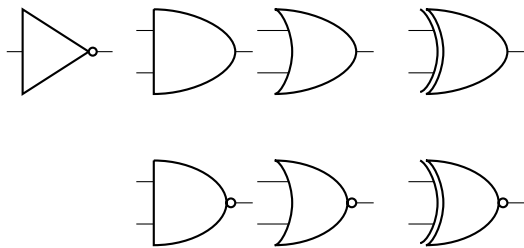


- Fill out the timing diagram for the circuit below:



## Logic Gates

- Label the following logic gates:



**Solution:** not, and, or, xor, nand, nor, xnor

- Convert the following to boolean expressions:

(a) NAND

**Solution:**  $\bar{A}\bar{B} + \bar{A}B + A\bar{B}$

(b) XOR

**Solution:**  $\bar{A}B + A\bar{B}$

(c) XNOR

**Solution:**  $\bar{A}\bar{B} + AB$

3. Create an AND gate using only NAND gates.



4. How many different two-input logic gates can there be? How many n-input logic gates?

**Solution:** A truth table with  $n$  inputs has  $2^n$  rows. Each logic gate has a 0 or a 1 at each of these rows. Imagining a function as a  $2^n$ -bit number, we count  $2^{2^n}$  total functions, or 16 in the case of  $n = 2$ .

## Boolean Logic

$$\begin{array}{llll}
 1 + A = 1 & A + \bar{A} = 1 & A + AB = A & (A + B)(A + C) = A + BC \\
 0B = 0 & B\bar{B} = 0 & A + \bar{A}B = A + B & \\
 \text{DeMorgan's Law: } & \overline{AB} = \bar{A} + \bar{B} & \overline{A + B} = \bar{A}\bar{B} & 
 \end{array}$$

1. Minimize the following boolean expressions:

(a) Standard:  $(A + B)(A + \bar{B})C$

**Solution:**

$$(AA + A\bar{B} + AB + B\bar{B})C = (A + A(\bar{B} + B))C = AC \quad (1)$$

(b) Grouping & Extra Terms:  $\bar{A}\bar{B}\bar{C} + \bar{A}B\bar{C} + AB\bar{C} + A\bar{B}\bar{C} + ABC + A\bar{B}C$

**Solution:**

$$\begin{aligned}
 \bar{A}\bar{C}(\bar{B} + B) + A\bar{C}(B + \bar{B}) + AC(B + \bar{B}) &= \bar{A}\bar{C} + A\bar{C} + AC & (2) \\
 &= \bar{A}\bar{C} + A\bar{C} + A\bar{C} + AC & (3) \\
 &= (\bar{A} + A)\bar{C} + A(\bar{C} + C) & (4) \\
 &= A + \bar{C} & (5)
 \end{aligned}$$

(c) DeMorgan's:  $\overline{A(\bar{B}\bar{C} + BC)}$

**Solution:**

$$\begin{aligned}
 \overline{A(\bar{B}\bar{C} + BC)} &= \bar{A} + \overline{\bar{B}\bar{C} + BC} & (6) \\
 &= \bar{A} + \overline{\bar{B}\bar{C}}\overline{BC} & (7) \\
 &= \bar{A} + (B + C)(\bar{B} + \bar{C}) & (8) \\
 &= \bar{A} + B\bar{C} + \bar{B}C & (9)
 \end{aligned}$$