

EECS 16A

Module 3

Lecture 2 (6A)


Topics

Classification of signal

Estimation of signal delay

* HW6A will be up today

Problems covering lec 6A

* Last lecture : Norm, inner product
ClassificationNorm:  $r = \text{Norm of } \bar{u}$

$$= \|\mathbf{u}\| = \sqrt{u_1^2 + \dots + u_n^2}$$

Inner product:

Inner product of \bar{u} & $\bar{v} = \langle \bar{u}, \bar{v} \rangle$

$$= u_1 v_1 + \dots + u_n v_n$$

$$= \bar{u}^T \bar{v} \quad \begin{matrix} T \rightarrow \text{transpose} \\ \rightarrow \end{matrix}$$

$$* \langle \bar{u}, \bar{v} \rangle = \langle \bar{v}, \bar{u} \rangle$$

$$* \langle \bar{u}, \bar{u} \rangle = \underline{u_1^2 + \dots + u_n^2} = \|\mathbf{u}\|^2$$

Database:

$$\bar{s}_1 = [1 \ 1 \ -1 \ -1 \ 1 \ 1]^T \quad \|\bar{s}_1\| = \sqrt{6}$$

$$\bar{s}_2 = [1 \ -1 \ -1 \ 1 \ 1 \ 1]^T \quad \|\bar{s}_2\| = \sqrt{6}$$

Received:

$$\bar{r} = [1 \ 1 \ -1 \ -1 \ 1 \ 1]^T = \bar{s}_1$$

Method 1: $\bar{e}_1 = \bar{r} - \bar{s}_1$, $\|\bar{e}_1\| = 0$ minimum

$$\bar{e}_2 = \bar{r} - \bar{s}_2, \|\bar{e}_2\| > 0$$

Smaller $\|e\| \rightarrow$ better match

Method 2:

$$\langle \bar{r}, \bar{s}_1 \rangle = 1 + 1 + 1 + 1 + 1 + 1 = 6 = \|\bar{s}_1\|^2$$

$$\langle \bar{r}, \bar{s}_2 \rangle = 1 - 1 + 1 - 1 + 1 + 1 = 2 < 6$$

Bigger inner product \rightarrow better match.

Relationship between inner product & error

$$\begin{aligned}
 \text{error } \bar{e} &= \bar{r} - \bar{s} \\
 \|\bar{e}\|^2 &= \langle \bar{e}, \bar{e} \rangle = \bar{e}^T \bar{e} \\
 &= (\bar{r} - \bar{s})^T (\bar{r} - \bar{s}) && (a+b)^T = a^T + b^T \\
 &= (\bar{r}^T - \bar{s}^T) (\bar{r} - \bar{s}) && \rightarrow \text{lec 5D} \\
 &= \bar{r}^T \bar{r} + \bar{s}^T \bar{s} - \bar{s}^T \bar{r} - \bar{r}^T \bar{s} \\
 &= \|\bar{r}\|^2 + \|\bar{s}\|^2 - \langle \bar{s}, \bar{r} \rangle - \langle \bar{r}, \bar{s} \rangle \\
 &= \|\bar{r}\|^2 + \|\bar{s}\|^2 - \underbrace{2\langle \bar{r}, \bar{s} \rangle}
 \end{aligned}$$

When $\langle \bar{r}, \bar{s} \rangle \rightarrow \max$
 $\|\bar{e}\| \rightarrow \min$

Ex: $\bar{s}_1 = [1 \ 1 \ -1 \ -1 \ 1 \ 1]^T$ $\|\bar{s}_1\| = \sqrt{6}$
 $\bar{s}_2 = [4 \ -4 \ -4 \ 4 \ 4 \ 4]^T$ $\|\bar{s}_2\| = 4\sqrt{6}$
 $\bar{r} = [1 \ 1 \ -1 \ -1 \ 1 \ 1]^T = \bar{s}_1$
 $\langle \bar{r}, \bar{s}_1 \rangle = 6 = \|\bar{s}_1\|^2$
 $\langle \bar{r}, \bar{s}_2 \rangle = 4 - 4 + 4 - 4 + 4 + 4 = 8 > 6$

Prob: \bar{r} matches \bar{s}_1 , but $\langle \bar{r}, \bar{s}_2 \rangle$ is larger.

Solution:

Design database signals with the same norm. $\|\bar{s}_1\| = \|\bar{s}_2\|$

HW: shazam problem

sending two signals simultaneously:

$$\bar{r} = \bar{s}_1 + \bar{s}_2 + \bar{n} \quad \bar{n} = \text{noise}$$

$$\|\bar{s}_1\| = \|\bar{s}_2\|$$

$$\begin{aligned} \langle \bar{r}, \bar{s}_1 \rangle &= \langle \bar{s}_1 + \bar{s}_2 + \bar{n}, \bar{s}_1 \rangle \\ &= \langle \bar{s}_1, \bar{s}_1 \rangle + \langle \bar{s}_2, \bar{s}_1 \rangle + \langle \bar{n}, \bar{s}_1 \rangle \\ &= \|\bar{s}_1\|^2 + \underbrace{\langle \bar{s}_2, \bar{s}_1 \rangle}_{\text{Interference}} + \langle \bar{n}, \bar{s}_1 \rangle \end{aligned}$$

$$\langle \bar{s}_2, \bar{s}_1 \rangle = \|\bar{s}_2\| \cdot \|\bar{s}_1\| \underbrace{\cos(\theta_2 - \theta_1)}_{\text{Minimize}} \rightarrow \text{lec 5D}$$

Choose $\theta_2 - \theta_1 = 90^\circ$
so that $\langle \bar{s}_2, \bar{s}_1 \rangle = 0$

i.e. make \bar{s}_1 & \bar{s}_2 orthogonal

$\langle \bar{n}, \bar{s}_1 \rangle = \text{small}$ if n is random noise

$$\langle \bar{r}, \bar{s}_1 \rangle \approx \|\bar{s}_1\|^2$$

$$\begin{aligned} \langle \bar{r}, \bar{s}_2 \rangle &= \|\bar{s}_2\|^2 + \underbrace{\langle \bar{s}_2, \bar{s}_1 \rangle}_0 + \underbrace{\langle \bar{n}, \bar{s}_2 \rangle}_{\text{Small}} \\ &\approx \|\bar{s}_2\|^2 \end{aligned}$$

Requirements for database:

★ $\|\bar{s}_1\| = \|\bar{s}_2\|$

★ \bar{s}_1 & \bar{s}_2 are orthogonal

$$\bar{s}_1 = [1 \ 1 \ -1 \ -1 \ 1 \ 1]^T$$

$$\bar{s}_2 = [1 \ -1 \ -1 \ 1 \ -1 \ 1]^T$$

$$\langle \bar{s}_1, \bar{s}_2 \rangle = 0$$

$$\|\bar{s}_1\| = \|\bar{s}_2\| = 6$$

If $\bar{r} = [1 \ -1 \ -1 \ 1 \ -1 \ 1] = \bar{s}_2$

$$\langle \bar{r}, \bar{s}_1 \rangle = \langle \bar{s}_2, \bar{s}_1 \rangle = 0$$


$$\langle \bar{r}, \bar{s}_2 \rangle = \langle \bar{s}_2, \bar{s}_2 \rangle = \|\bar{s}_2\|^2 = 6$$

Case I	Case II	Case III
$r = \bar{s}_1 + \bar{s}_2$	$\bar{r} = \bar{s}_1$	$\bar{r} = \bar{s}_2$
$\langle \bar{r}, \bar{s}_1 \rangle = 6 \checkmark$	$\langle \bar{r}, \bar{s}_1 \rangle = 6 \checkmark$	$\langle \bar{r}, \bar{s}_1 \rangle = 0$
$\langle \bar{r}, \bar{s}_2 \rangle = 6 \checkmark$	$\langle \bar{r}, \bar{s}_2 \rangle = 0$	$\langle \bar{r}, \bar{s}_2 \rangle = 6 \checkmark$

Toy GPS problem:

$$s_1 = [1 \ 1 \ -1 \ -1 \ 1 \ 1]^T \quad \| \bar{s}_1 \| = \| \bar{s}_2 \|$$

$$s_2 = [1 \ 1 \ -1 \ 1 \ -1 \ 1]^T \quad \langle \bar{s}_1, \bar{s}_2 \rangle = 0$$

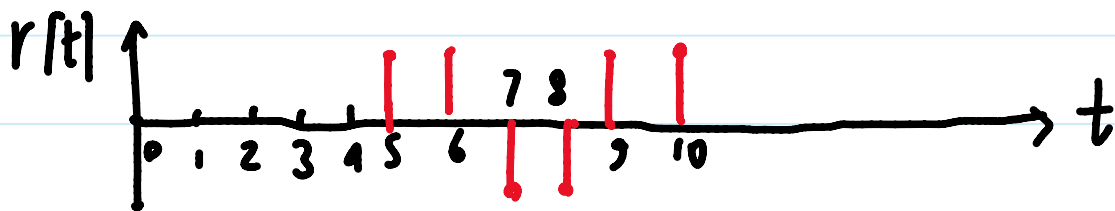
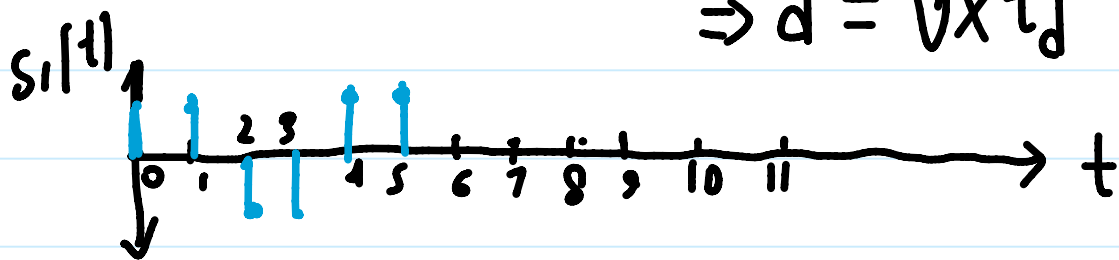


Distance = d

Signal velocity = v

Signal delay, $t_d = d/v$

$$\Rightarrow d = v \times t_d$$



From the plot

$$s_1[0] = 1 = r[5] \quad r[t] = s_1[t-5]$$

$$s_1[1] = 1 = r[6]$$

$$s_1[2] = -1 = r[7]$$

$$s_1[3] = -1 = r[8]$$

$$s_1[4] = 1 = r[9]$$

$$s_1[5] = 1 = r[10]$$



Inner product:

$$\bar{r}[t] = [0 \ 0 \ 0 \ 0 \ 0 \ 1 \ 1 \ -1 \ -1 \ 1 \ 1]$$

$$\bar{s}_1[t] = [1 \ 1 \ -1 \ -1 \ 1 \ 1 \ 0 \ 0 \ 0 \ 0 \ 0]$$

$$\langle \bar{r}[t], \bar{s}_1[t] \rangle = 1 \neq 6 \text{ ie. } \|\bar{s}_1\|^2$$

$$\bar{r}[t] = [0 \ 0 \ 0 \ 0 \ 0 \ 1 \ 1 \ -1 \ -1 \ 1 \ 1]$$

$$\bar{s}_1[t-5] = [0 \ 0 \ 0 \ 0 \ 0 \ 1 \ 1 \ -1 \ -1 \ 1 \ 1]$$

$$\langle \bar{r}[t], \bar{s}_1[t-5] \rangle = 6 = \|\bar{s}_1\|^2$$

How do we know delay is 5

Find $\langle \bar{r}[t], \bar{s}_1[t-k] \rangle$ for varying k
where k is the time shift of $\bar{s}_1[k]$

Powerpoint demo of sliding inner product

$$\begin{aligned} & \langle \bar{r}[t], \bar{s}_1[t-k] \rangle \\ &= \sum_{i=-\infty}^{\infty} r[i] s_1[i-k] \quad \rightarrow \text{Generic expression for } -\infty \text{ to } \infty \\ &= \text{cross-correlation of } \bar{s}_1 \text{ w.r.t. } \bar{r} \\ &= \text{corr}_r(s_1)[k] \end{aligned}$$

time shift of \bar{s}_1
Shifting signal
Stationary signal

$$\begin{aligned} \text{corr}_r(s_1)[k] &= \sum_{i=-\infty}^{\infty} r[i] s_1[i-k] \\ &= \langle \bar{r}[t] \bar{s}_1[t-k] \rangle \end{aligned}$$

Dis 6A, 6B: mech prob